

KROKUJ A ZAPIŠ

2	→	→	4
---	---	---	---

→ →

1	2	3	4	5
---	---	---	---	---

1	→	→	
---	---	---	--

0	1	2	3	4
---	---	---	---	---

3	→	→	
---	---	---	--

2	3	4	5	6
---	---	---	---	---

2	→	→	→	
---	---	---	---	--

2	3	4	5	6
---	---	---	---	---

3	→	→	5
---	---	---	---

2	3	4	5	6
---	---	---	---	---

2		4
---	--	---

1	2	3	4	5
---	---	---	---	---

5		7
---	--	---

4	5	6	7	8
---	---	---	---	---

4		5
---	--	---

2	3	4	5	6
---	---	---	---	---

●

6		8
---	--	---

5	6	7	8	9
---	---	---	---	---

4	→	→	
---	---	---	--

3	4	5	6	7
---	---	---	---	---

0		2
---	--	---

0	1	2	3	4
---	---	---	---	---

1	→	→	→	
---	---	---	---	--

0	1	2	3	4
---	---	---	---	---

Copyright: © Nakladatelství Fraus, Plzeň 2007

SČÍTEJ

1	4
□	

2	1
□	

3	3
□	

1	3
□	

4	2
□	

UBER 1 A ODČÍTEJ

5	-	□	=	□
---	---	---	---	---

7	-	□	=	□
---	---	---	---	---







2	-	□	=	□
---	---	---	---	---


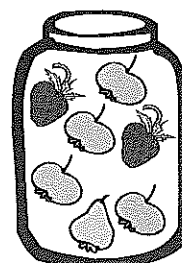
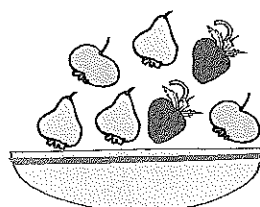
3	-	□	=	□
---	---	---	---	---

4	-	□	=	□
---	---	---	---	---

6	-	□	=	□
---	---	---	---	---

ZAPIŠ KOLIK



DOPLŇ ČÍSLA

0	
3	

1	
7	

	5
8	

4	2

3	1

2	1

1	0

	2
8	

2	
4	

0	
7	

3	
7	

5	1

	1
2	

4	1

	3
8	

3	2

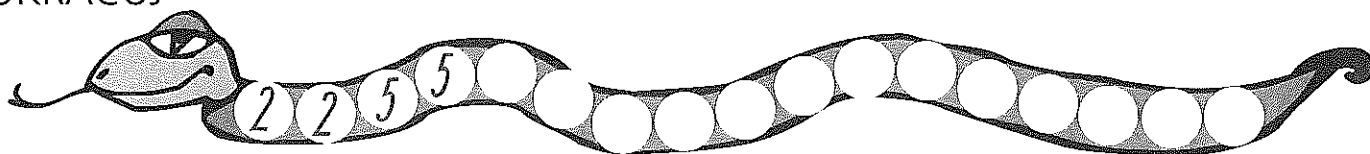
	4
8	

5	0

	2
7	

3	
6	

POKRAČUJ



Copyright: © Nakladatelství Fraus, Plzeň 2007

PŘIDEJ 1 A SČÍTEJ

$$3 + \square = \square$$

$$4 + \square = \square$$

$$5 + \square = \square$$

$$2 + \square = \square$$

$$1 + \square = \square$$

$$0 + \square = \square$$

POMOZ ZVÍŘÁTKŮM NAJÍT CESTU VEN Z BLUDIŠTĚ

